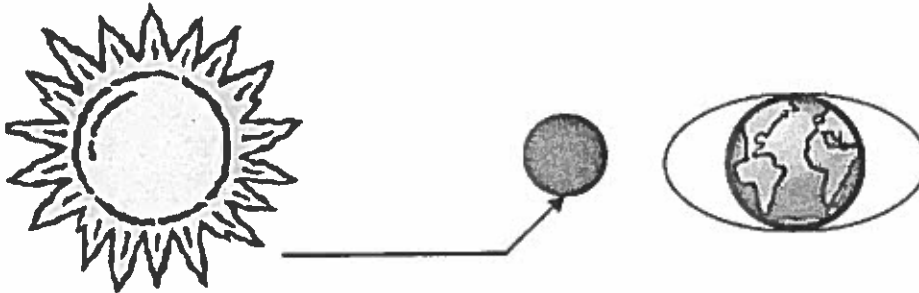


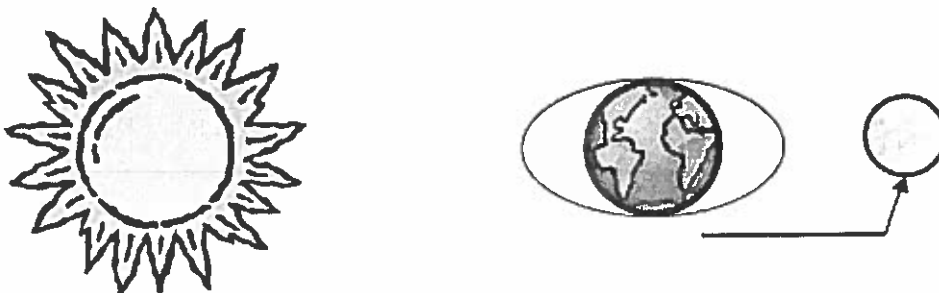
# Spring and Neap Tides

Name \_\_\_\_\_ Class \_\_\_\_\_

1. Spring or Neap Tide? (Circle) How do you know? \_\_\_\_\_  
Color in the tides with a blue pencil. During what moon phase does this type of tide occur?



1. Spring or Neap Tide? (Circle) How do you know? \_\_\_\_\_  
Color in the tides with a blue pencil. During what moon phase does this type of tide occur?



1. Spring or Neap Tide? (Circle) How do you know? \_\_\_\_\_  
Color in the tides with a blue pencil. During what moon phase does this type of tide occur?



1. Spring or Neap Tide? (Circle) How do you know? \_\_\_\_\_  
Color in the tides with a blue pencil. During what moon phase does this type of tide occur?



# My Tides Booklet


**High Tide**

**Low Tide**




**High Tide Facts:**  
 Occurs \_\_\_\_\_ a day.  
 Water \_\_\_\_\_ to its  
 highest level.  
 Water is the \_\_\_\_\_ up  
 the beach.  
 Occur during \_\_\_\_\_  
 moon phase.

**Low Tide Facts:**  
 Occurs \_\_\_\_\_ a day.  
 Water \_\_\_\_\_ to its  
 lowest level.  
 Water is the \_\_\_\_\_  
 down the beach.  
 Occur during \_\_\_\_\_  
 moon phase.



**Spring  
Tide**



**Neap  
Tide**



**Spring Tide Facts:**  
 Occurs \_\_\_\_\_ per month.  
 High Tides reach their  
 \_\_\_\_\_ level.  
 Occur during \_\_\_\_\_ and  
 \_\_\_\_\_ moon phases.  
 Occur when the Sun, Moon  
 and Earth \_\_\_\_\_.

**Neap Tide Facts:**  
 Occurs \_\_\_\_\_ per month.  
 High Tides reach their  
 \_\_\_\_\_ level.  
 Occur during \_\_\_\_\_ and  
 \_\_\_\_\_ moon phases.  
 Occur when the Sun, Moon  
 and Earth \_\_\_\_\_.